

**MINI TEST 2  
PRIMARY 2  
MATHEMATICS**

Name: \_\_\_\_\_ (     )

Class: 2 Respect (     )

Date : \_\_\_\_\_ April 2016

Total time for Mini Test: 1h

**INSTRUCTIONS TO CANDIDATES**

1. Write your Name, Class and Register No. in the spaces provided above.
2. DO NOT turn over this page until you are told to do so.
3. Follow all instructions carefully.
4. Answer all questions.
5. Write all your answers in this booklet.

Marks (Section A)	6
Marks (Section B)	32
Marks (Section C)	12
Total Marks (Section A & B & C)	50



Section A (6 questions x 1 mark each)

Choose the correct answers (1, 2, 3 or 4) and write them in the brackets provided.

1. There are 4 blue beans in each box. How many blue beans are there in 7 such boxes?

(1) 11

(2) 27

(3) 28

(4) 47

( )

2. 6 groups of 5 is not the same as \_\_\_\_\_

(1) 6 fives

(2)  $5+5+5+5+5$

(3)  $6 \times 5$

(4)  $6+6+6+6+6$

( )

3. Mrs Tan bought 20 apples.

She put them equally into 4 baskets.

How many apples were there in each basket?

Choose the correct division sentence below to solve the problem.

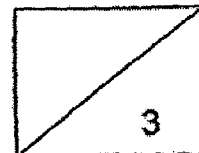
(1)  $20 \div 1 = 20$

(2)  $20 \div 20 = 1$

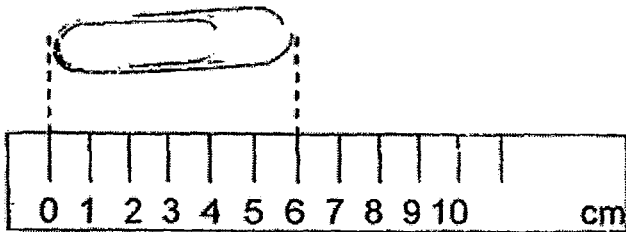
(3)  $20 \div 2 = 10$

(4)  $20 \div 4 = 5$

( )




4. What is the length of the paper clip?



- (1) 1 cm                      (2) 5 cm  
(3) 6 cm                      (4) 4 cm

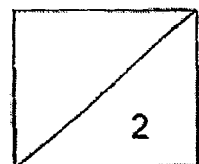
(     )

5. Which one of the following lines below is the **longest**?



- (1) A                              (2) B  
(3) C                              (4) D

(     )



6. The length of a wooden pencil is about \_\_\_\_\_.

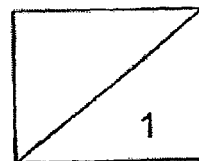
(1) 10 cm

(2) 1 m

(3) 1 cm

(4) 10 m

( )



Section B (16 questions x 2 marks each)

Write the correct answer in the space provided.


7. \_\_\_\_\_ x 3 = 24

8. 25 is \_\_\_\_\_ less than 35.

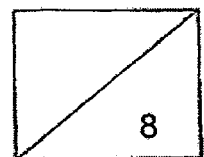
9. Fill in the missing numbers.

12, \_\_\_\_\_, 20, 24, 28, \_\_\_\_\_, 36, 40

10. Use the 3 numbers below to form a multiplication equation.



\_\_\_\_\_ x \_\_\_\_\_ = \_\_\_\_\_



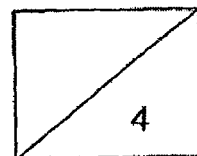
11. A tricycle has 3 wheels.

How many wheels do 6 tricycles have?

6 tricycles have \_\_\_\_\_ wheels.

12. Divide 16 telephones into 2 equal groups.

There are \_\_\_\_\_ telephones in each group.



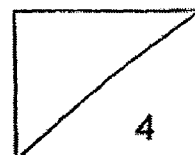
13. Look at the picture below carefully.  
36 ducks are divided equally into groups of 4.  
**Circle** the ducks in groups of 4.



14. There are 5 eggs in each basket.  
How many eggs are there in 7 such baskets?

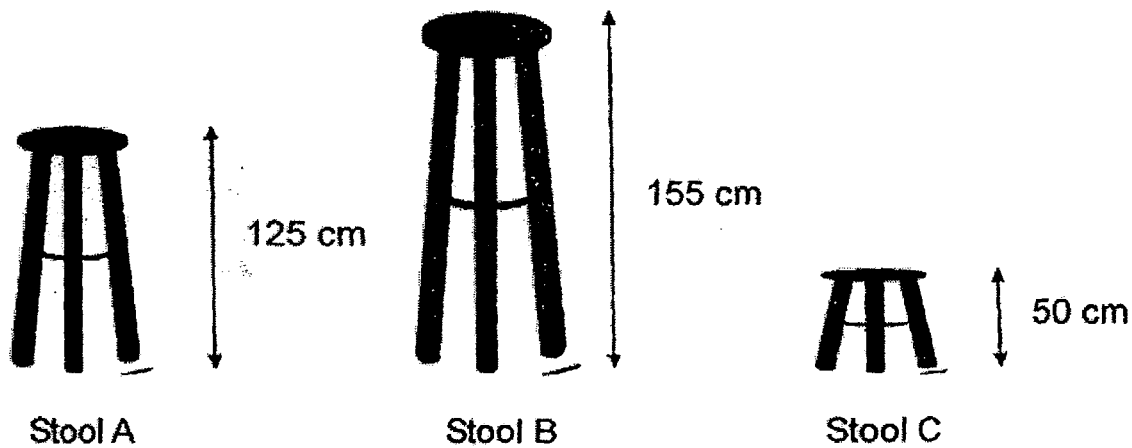


There are \_\_\_\_\_ eggs in 7 such baskets.

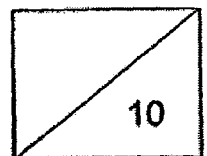




Use the picture below to answer Questions 15 and 16.



15. Stool C is \_\_\_\_\_ cm shorter than Stool B.
16. If Stool A is stacked on top of Stool B, the new total height will be \_\_\_\_\_ cm.
17.  $3 \times \underline{\hspace{2cm}} = 14 + 7$
18. 16 is 4 more than \_\_\_\_\_  $\times 4$ .
19. \_\_\_\_\_  $+ 25 = 50$



20. Find the missing number.


$$6 = \underline{\quad ? \quad} \times 3$$

The missing number is                     .

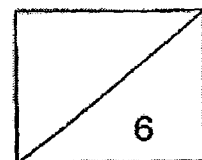
21. If  stand for 9,

 stand for                     .

22. Rahim had 8 coloured strips of length 3 cm each.  
He pasted them side by side to make a long strip.



The long strip was                      cm.



Section C (4 questions x 3 marks each)

Solve each of the following problems.

Show all your workings and statements clearly.

Write your answers in the spaces provided.

Working

23. Tammy has 4 boxes of erasers.

Each box has 5 erasers.

How many erasers does Tammy have altogether?




Tammy has \_\_\_\_\_ erasers altogether.

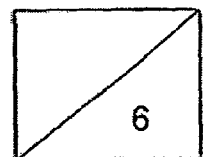
24. Li Lin is 123 cm tall.

Charmaine is 20 cm taller than Li Lin.

How tall is Charmaine?



Charmaine is \_\_\_\_\_ cm.



Working

25. 32 marbles were shared equally among 4 boys.  
How many marbles did each boy get?

$$\square \bigcirc \square = \square$$

Each boy got \_\_\_\_\_ marbles.

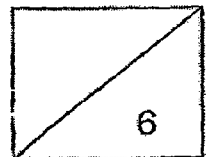
26. Kim collected a total of 227 plastic bags and paper bags  
for her recycling project in school.  
There were 88 paper bags.  
How many more plastic bags than paper bags did she  
collect?

$$\square \bigcirc \square = \square$$

$$\square \bigcirc \square = \square$$

She collected \_\_\_\_\_ more plastic bags.

.....END OF PAPER.....  
PLEASE CHECK YOUR WORK.



# ANSWER SHEET

EXAM PAPER 2016 (P2)

SCHOOL : PEI HWA PRESBYTERIAN PRIMARY SCHOOL

SUBJECT : MATHEMATICS

TERM : MINI TEST 2

Q1	Q2	Q3	Q4	Q5	Q6				
3	2	4	3	3	1				

Q7) 8

Q8) 10

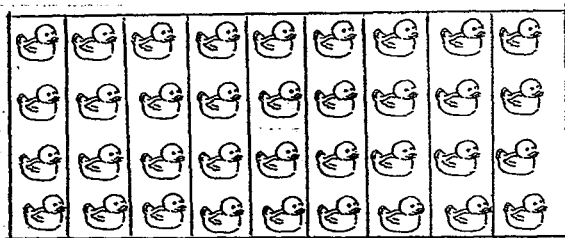
Q9) 12, 16, 20, 24, 28, 32, 36, 40

Q10)  $6 \times 4 = 24$

Q11) 18

Q12) 8

Q13)



Q14) 35

Q15) 105cm

Q16) 280cm

Q17) 7

Q18) 3

Q19) 25

Q20) 2

Q21) 15

Q22) 24cm

Q23)  $4 \times 5 = 20$

Tammy has 20 erasers altogether.

Q24)  $123 + 20 = 143$

Charmaine is 143cm.

Q25)  $32 \div 4 = 8$

Each boy got 8 marbles.

Q26)  $227 - 88 = 139$

$139 - 88 = 51$

She collected 51 more plastic bags.